



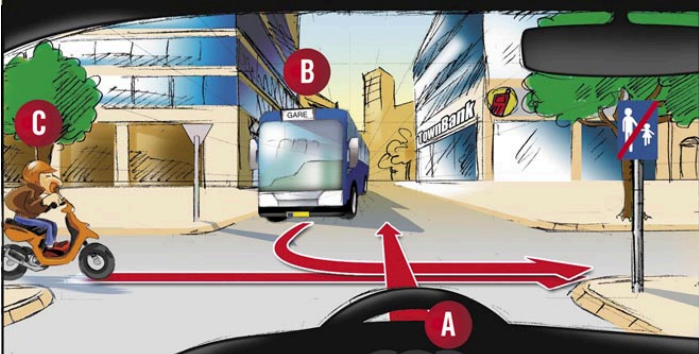
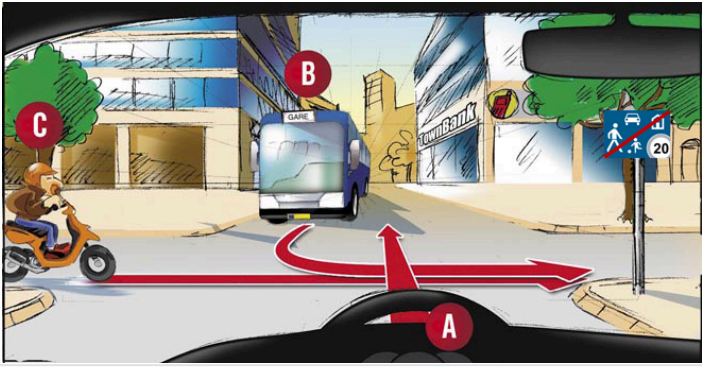
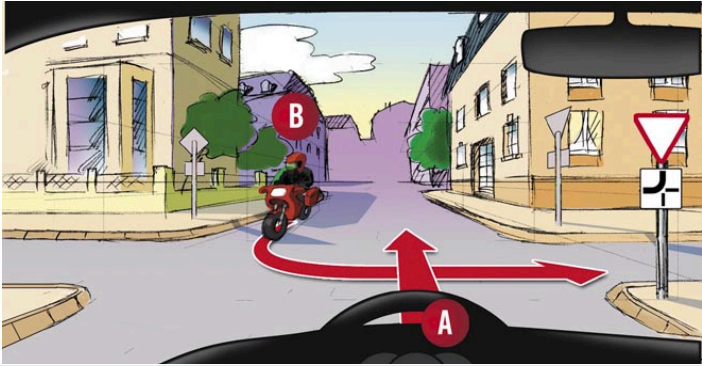








No	Question	Img	Options	Answer
1	Looking over your shoulder is recommended:		<p>In a steep hill downwards.</p> <p>When changing lanes.</p> <p>When coming out from a private area.</p>	When changing lanes.
2	The maximum speed for mopeds is 45 km/h:		<p>No</p> <p>Yes</p>	Yes
3	How can you reduce the fuel consumption of your vehicle?		<p>By changing fuel brand frequently.</p> <p>By heating the engine before driving off.</p> <p>By keeping the prescribed pressure in the tyres.</p>	By keeping the prescribed pressure in the tyres.
4	Always install the tyres with the greatest depth profile at the front of the vehicle:		<p>No.</p> <p>Yes.</p>	No.
5	This traffic sign allows you to stop to unload goods:		<p>No.</p> <p>Yes.</p>	No.

6	What does this traffic sign mean?		Access forbidden for pedestrians.	Approach of a pedestrian crossing.
7	What do you do at this traffic sign?		Approach of a pedestrian crossing. Attention children.	Approach of a pedestrian crossing.
8	As of this traffic sign:		I have to give way to all traffic. If there is no stop line I continue without stopping. If there is no stop line I have to stop where visibility is sufficient.	Approach of a pedestrian crossing.
9	I give way to the moped (C):		I accelerate. I'm adapting my speed. I'm approaching a descent.	I'm adapting my speed.
			No. Yes.	Yes.

10	I go last:		No. Yes.	No.
11	I go first:		No. Yes.	No.
12	I give way to the car (B):		No. Yes.	No.
13	When carrying luggage on the roof of your car:		Luggage racks are only allowed on utility vehicles. Maximum authorized mass can be exceeded. Visibility cannot be impacted.	Visibility cannot be impacted.
14	Do you overtake the cyclists in this situation?		No. Yes.	No.

15	What is the speed limit for mopeds inside built-up areas?		45 km/h 50 km/h	45 km/h
16	At this place you want to turn right:		My vehicle risks skidding. My vehicle, being equipped with the ABS and ESP systems, I risk nothing. My vehicle, being equipped with winter tyres, cannot skid.	My vehicle risks skidding.
17	What is your behaviour in this steep hill downwards?		I continuously use the service brake. I shift down a gear before driving downhill. I shift up a gear.	I shift down a gear before driving downhill.
18	How do you behave in winter as of this traffic sign?		I avoid sudden steering manoeuvres. I should not brake at all. If my vehicle is equipped with the ASR system, there is no risk to me.	I avoid sudden steering manoeuvres.

19	As of this traffic sign you expect:		<p>A dangerous steep hill upwards on a 5 km length.</p> <p>A succession of turns beginning after 5 km.</p> <p>A winding road on a 5 km length.</p>	<p>A winding road on a 5 km length.</p>
20	Does this additional sign apply to your vehicle?		<p>No.</p> <p>Yes.</p>	<p>Yes.</p>
21				
22	Fuel consumption can be reduced by:		<p>A well-tuned and technically perfect engine.</p> <p>Keeping the engine running with high engine rpm.</p> <p>Leaving the engine running while extended waiting time.</p>	<p>A well-tuned and technically perfect engine.</p>
23	You want to make a u-turn on a public road:		<p>I do not need to give way to other traffic.</p> <p>I have to show my intention clearly and in time.</p> <p>Making a u-turn on a public road is always</p>	<p>I have to show my intention clearly and in time.</p>

			forbidden.	
24	<p>In this situation, you must be prepared to brake as the car could pull out in front of you.</p>		<p>No.</p> <p>Yes.</p>	<p>Yes.</p>
25	<p>This traffic sign allows you to stop:</p>		<p>No</p> <p>Yes</p>	<p>Yes</p>

26

These traffic signs are: A B C

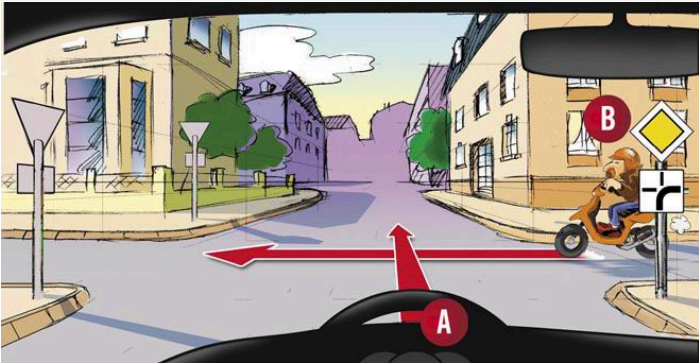



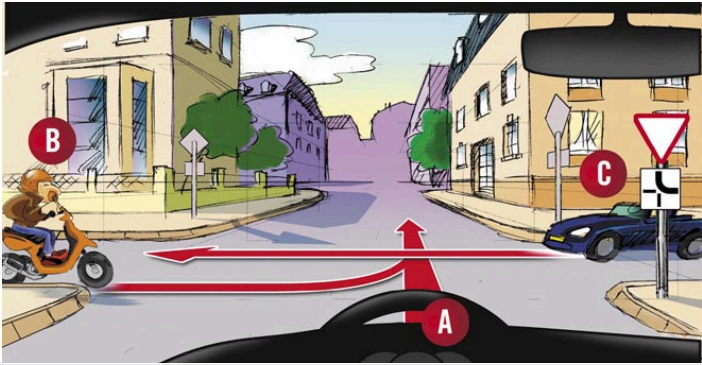
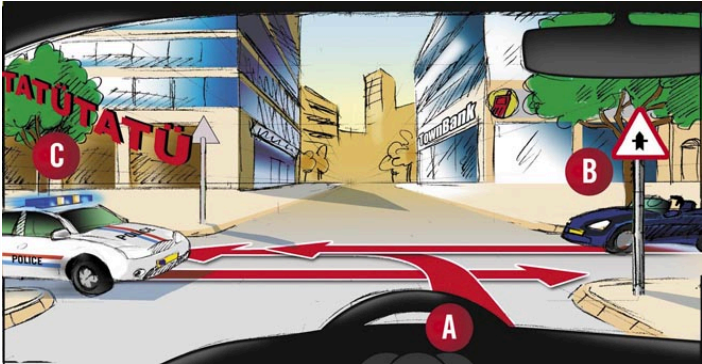
Indication signs



Obligation signs



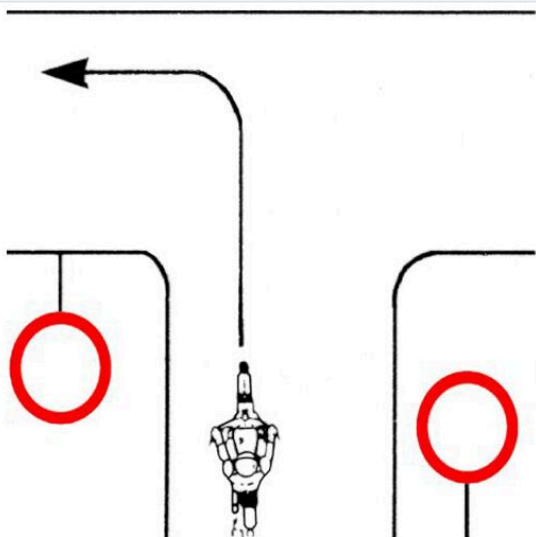
Prohibition signs





Indication signs


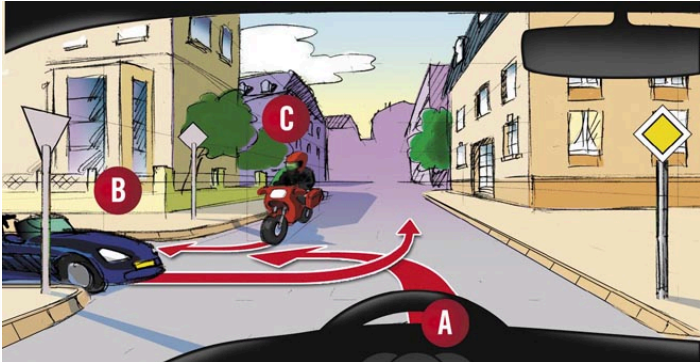

27	What does this traffic sign mean?		Forbidden to turn left. Left bend. Obligation to turn left.	Forbidden to turn left.
28	As of this traffic sign you have the right:		To make a U-turn. To turn left.	To turn left.
29	I go first:		Yes. No.	No.
30	In which order do these vehicles go?		A - C - B B - A - C C - B - A	C - B - A


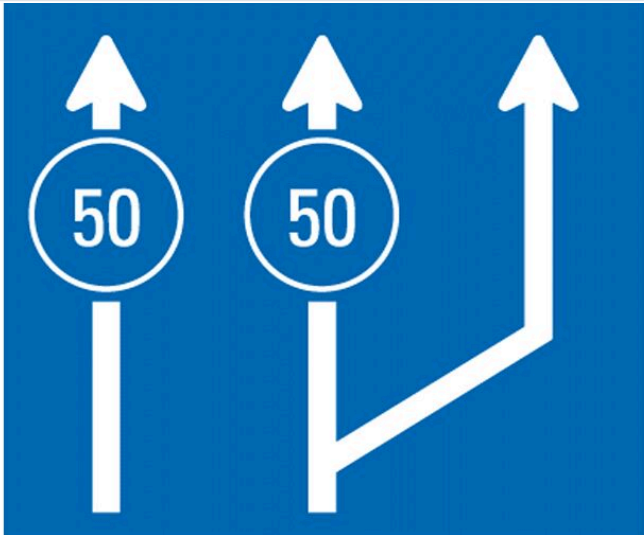


31	In which order do these vehicles go?		A - C - B B - A - C C - A - B	C - A - B
32	I go last:		No. Yes.	No.
33	The driver of a motor vehicle has to carry at least one warning triangle in his vehicle:		No. Yes.	Yes.
34	Children of less than 3 years have to be seated in a special device of deduction (child seat):		No. Yes.	Yes.
35	How many people can you carry on your tractor?		4, if I'm not driving faster than 25 km/h. As many people as seats are mentioned on the registration certificate. The transport of people on a tractor is forbidden.	As many people as seats are mentioned on the registration certificate.
36	You follow a truck-trailer which wants to turn right on a narrow street.		The truck-trailer will stop to let pass the vehicles that follow.	To be able to turn right, the truck-trailer will divert towards the left.


	What must you expect?		To be able to turn right, the truck-trailer will divert towards the left.	
			To turn right, the truck-trailer does not need to leave its lane.	
37	You are driving a car. Are you allowed to overtake a motorcycle without a sidecar at this place?		No. Yes.	Yes.
38	How do you behave as of this traffic sign?		<p>I avoid sudden steering manoeuvres.</p> <p>I should not brake at all.</p> <p>If my vehicle is equipped with the ABS system, this sign does not apply to me.</p>	I avoid sudden steering manoeuvres.



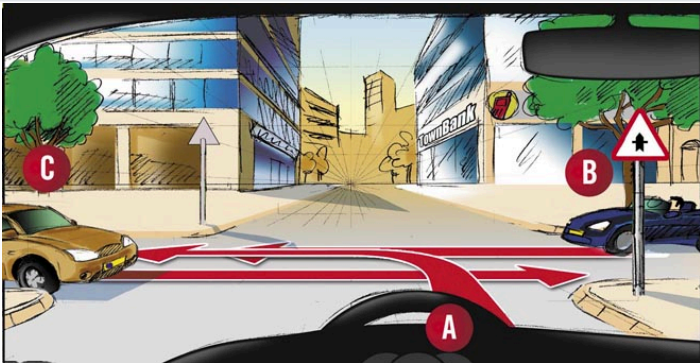
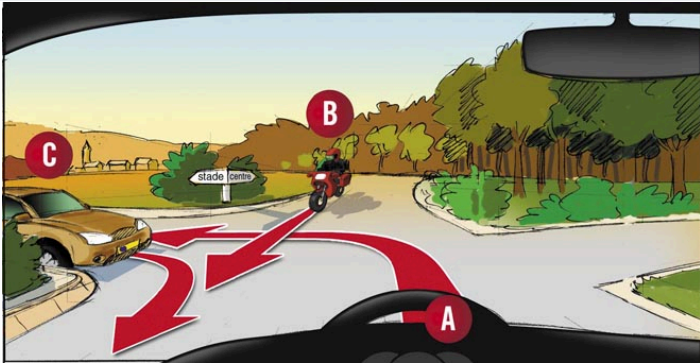
39	Do you have to respect this speed limit?		No. Yes.	No.
40	From this signal, do you have the right to park your moped on the sidewalk?		No Yes	Yes
41	Is there a minimum profile depth for tyres of a moped?		No Yes	Yes
42	Is this moped well positioned to turn left?		No Yes	No


43	Approaching an intersection you see these traffic signs:		<p>I drive through the intersection without stopping.</p> <p>I drive up to the intersection and give way to left and right.</p> <p>I have to stop.</p>	<p>I drive through the intersection without stopping.</p>
44	Oncoming traffic has priority:		<p>No.</p> <p>Yes.</p>	<p>Yes.</p>
45	This traffic sign shows a lane closed for traffic. Can this lane be opened to opposite traffic?		<p>No.</p> <p>Yes.</p>	<p>Yes.</p>
46	I give way to the cyclist (B):		<p>No.</p> <p>Yes.</p>	<p>Yes.</p>



47	I go first:		No. Yes.	No.
48	I go last:		No. Yes.	No.
49	The load:		Can drag on the road. May always extend to more than 1 meter in the front of the car. The visibility of the driver must not be hindered.	The visibility of the driver must not be hindered.
50	In this street:		I continue to drive at 50 km/h. I expect to children that may arise between parked cars. The road surface can influence the length of the reaction distance.	I expect to children that may arise between parked cars.



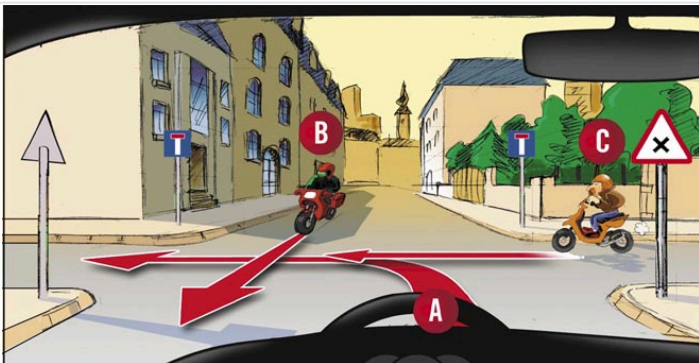
51	You want to pass around the van. What do you do?		I accelerate to pass before the blue car.	
			I do not need to stop.	I slow down and stop.
			I slow down and stop.	
52	Are you allowed to drive at 80 km/h in the left lane?		No.	
			Yes.	Yes.
53	This traffic sign indicates that:		I'm allowed to drive at 100 km/h in the left lane.	
			I'm allowed to drive at 60 km/h in the right lane.	I'm driving on a motorway.
			I'm driving on a motorway.	
54	What does this traffic sign mean?		Projection of gravel.	
			Reduced visibility.	Projection of gravel.
			Rocks falling down.	

55	A moped rider is allowed to enter this street:		No Yes	No
56	What do you have to pay attention at when passing round a bus at a bus stop?		<p>I honk and pass without slowing down.</p> <p>I pass as close to the bus as possible in order to not leave my lane.</p> <p>I'm prepared to brake as pedestrians could appear suddenly in front of the bus in order to cross the road.</p>	<p>I'm prepared to brake as pedestrians could appear suddenly in front of the bus in order to cross the road.</p>
57	What is the risk of driving on a soft verge?		<p>A sudden steering manoeuvre can swerve me to the left lane.</p> <p>In dry weather there is no danger.</p>	<p>A sudden steering manoeuvre can swerve me to the left lane.</p>
58	Within 10 km around his home, the rider of a moped must have the registration papers on him:		No. Yes.	Yes.


59	Are you allowed to wait at this place for the duration of one hour?		<p>No.</p> <p>Yes.</p>	No.
60	An obstacle is indicated by this traffic sign:		<p>I by-pass the obstacle either by left or by right.</p> <p>I by-pass the obstacle on the left.</p> <p>I by-pass the obstacle on the right.</p>	I by-pass the obstacle on the right.
61	I go first:		<p>No.</p> <p>Yes.</p>	Yes.
62	In which order do these vehicles go?		<p>B-A-C</p> <p>C-B-A</p> <p>"One of these drivers has to refrain from his ""right of priority""."</p>	"One of these drivers has to refrain from his ""right of priority""."
63	Do you have to use the front and the rear brake of the moped at the same time?		<p>No</p> <p>Yes</p>	Yes


64	To be more visible, the rider of a moped:		<p>Never switches on the dimmed headlights.</p> <p>Wears protective clothing in bright colours.</p>	Wears protective clothing in bright colours.
65	On which roads are you allowed to make a u-turn?		<p>On motorways.</p> <p>On one-way streets.</p> <p>On priority roads outside built-up areas.</p>	On priority roads outside built-up areas.
66	Inside a built-up area, you want to overtake a cyclist:		<p>Inside built-up areas, any overtaking is forbidden.</p> <p>The lateral distance has to be at least 1,5 meters, as the cyclist could make a sudden move towards the side.</p>	The lateral distance has to be at least 1,5 meters, as the cyclist could make a sudden move towards the side.
67	This traffic sign forbids access to:		<p>Bicycles.</p> <p>Mopeds.</p> <p>Motorcycles.</p>	Motorcycles.

68	As of this traffic sign you expect:		<p>Reduced visibility due to fog, snow or rain.</p> <p>Rocks falling down.</p> <p>The projection of gravel.</p>	Reduced visibility due to fog, snow or rain.
69	In this zone:		<p>Access is forbidden to trucks.</p> <p>Cars are allowed to wait.</p> <p>Trucks are allowed to wait.</p>	Cars are allowed to wait.
70	Do you have to check regularly tyre pressure?		<p>No.</p> <p>Yes.</p>	Yes.
71	At 40 km/h, a vehicle covers the following distance per second:		<p>1 meter.</p> <p>12 meters.</p> <p>20 meters.</p>	12 meters.
72	What can be the effect of drinking alcohol?		<p>Alcohol does not unsettle my reaction capacity.</p> <p>The field of vision of the driver is reduced.</p>	The field of vision of the driver is reduced.
73	When leaving a private property:		I do not need to give way to the pedestrians on the sidewalk that I have to cross.	I have to give way to all traffic.

			<p>I have to give way to all traffic.</p> <p>I only have to give way to the right.</p>	
74	As of this traffic sign:		<p>Stopping is forbidden.</p> <p>Waiting is forbidden.</p>	Waiting is forbidden.
75	Which statement is correct:		<p>I have to expect vehicles coming out from this street.</p> <p>No vehicle can come out from this side of the street.</p> <p>Residents can access the street from this side.</p>	I have to expect vehicles coming out from this street.
76	In which order do these vehicles go?		<p>A - B - C</p> <p>B - A - C</p> <p>B - C - A</p>	B - C - A
77	The licence B also authorises you to drive:		<p>A bus with 10 seats.</p> <p>A motorcycle.</p> <p>A tractor.</p>	A tractor.

78	Regarding the acceleration lane on the motorway:		<p>"I continue up to the ""Give way"" sign and have always to stop there."</p> <p>This lane is used to accelerate and integrate myself to the traffic on the motorway.</p> <p>This lane is used to slow down and shift down when I am leaving the motorway.</p>	This lane is used to accelerate and integrate myself to the traffic on the motorway.
79	A 2nd yellow flashing light is compulsory:		<p>If I'm driving without a load.</p> <p>If the first light is not visible from all sides.</p> <p>Only for high-speed tractors (TGV).</p>	If the first light is not visible from all sides.
80	High rpm of the engine increase fuel consumption:		<p>No</p> <p>Yes</p>	Yes
81	A moped rider is allowed to enter this street:		<p>No</p> <p>Yes</p>	No

82	What is your behaviour approaching this traffic sign?		<p>I put the gear to neutral.</p> <p>I shift down a gear.</p> <p>I shift up a gear.</p>	I shift down a gear.
83	A centre line (discontinued line):		<p>Can be crossed, provided this causes no hindrance to the traffic.</p> <p>Can never be crossed, neither completely nor partially.</p> <p>Can only be crossed to pass round an obstacle.</p>	Can be crossed, provided this causes no hindrance to the traffic.
84	"What do you mean by ""defensive driving""?"		<p>I always circulate in an extremely slow pace.</p> <p>I anticipate possible mistakes of other drivers.</p> <p>I stop at every crossing.</p>	I anticipate possible mistakes of other drivers.
85	What safety distance to the preceding vehicle do you have to keep outside built-up areas?		<p>10 meters are sufficient.</p> <p>5 meters are sufficient.</p> <p>At least 2 seconds.</p>	At least 2 seconds.

86	As of this traffic sign:		<p>I do not any more have the right to overtake.</p> <p>I'm still allowed to overtake.</p> <p>Stopping on the railway track is allowed.</p>	I do not any more have the right to overtake.
87	You are driving a car towing a trailer. What is the speed limit in rainy weather?		<p>30 km/h in built-up areas.</p> <p>90 km/h on the motorway.</p> <p>90 km/h outside of built-up areas.</p>	90 km/h on the motorway.
88	To permit passage of emergency services, the users of the motorway shall leave a free central passage:		<p>No.</p> <p>Yes.</p>	Yes.
89	At night, you have to switch from full beam to dipped headlights:		<p>When crossing a pedestrian.</p> <p>When you are driving outside built-up areas.</p> <p>When you are followed closely by another vehicle.</p>	When crossing a pedestrian.
90	What document must the rider of a moped be able to introduce during a control?		<p>The certificate of roadworthiness.</p> <p>The tax vignette.</p> <p>The vignette of compliance.</p>	The vignette of compliance.

91

What traffic sign shows that you have priority? A B C


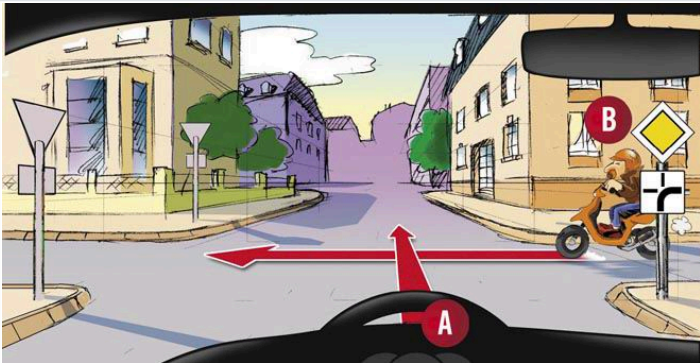
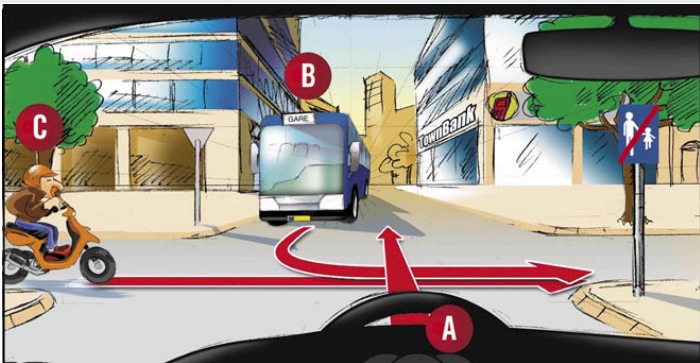





Alternative A




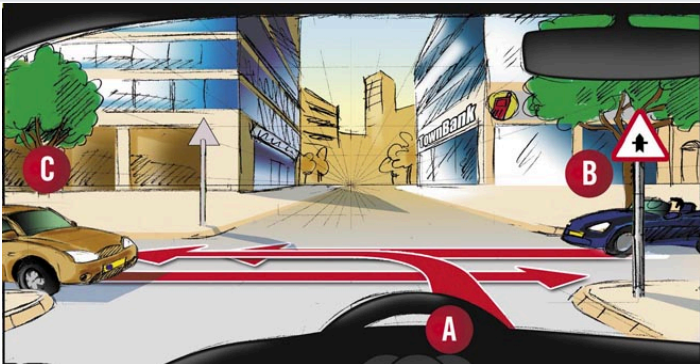
Alternative B


Alternative C



Alternative A



92	As of this traffic sign (in normal traffic conditions):		<p>I have to drive at least at 30 km/h.</p> <p>I'm allowed to drive at 20 km/h.</p> <p>I'm not allowed to drive faster than 30 km/h.</p>	I have to drive at least at 30 km/h.
93	I give way to the moped (B):		<p>No.</p> <p>Yes.</p>	Yes.
94	I go last:		<p>No.</p> <p>Yes.</p>	Yes.
95	Fuel consumption increases:		<p>If I drive by anticipating traffic.</p> <p>If I put luggage rails on the roof of the car.</p>	If I put luggage rails on the roof of the car.




96	A moped rider is allowed to enter this street:		No. Yes.	Yes.
97	This traffic sign means the end of:		A mandatory minimum speed. A speed limitation. A waiting restriction.	A speed limitation.
98	Who is allowed to access this street?		A car. A coach. A motorcycle without a sidecar.	A motorcycle without a sidecar.
99	In a long steep hill downwards:		I brake continuously. I shift down before the steep hill downwards.	I shift down before the steep hill downwards.




100	This traffic sign means:		<p>I'm allowed to load or unload my vehicle.</p> <p>I'm allowed to pick up or set down passengers.</p> <p>Stopping is forbidden.</p>	Stopping is forbidden.
101	As of this traffic sign:		<p>I must expect a freshly tarred road.</p> <p>I must expect rocks on the road.</p> <p>I reduce the safety distance to the preceding vehicle.</p>	I must expect rocks on the road.
102	At an intersection, the orange light is flashing. Do you have to stop?		<p>No.</p> <p>Yes.</p>	Yes.
103	I give way to the car (B):		<p>No.</p> <p>Yes.</p>	No.
104	The obligation to keep a		Applies to all vehicles.	Applies to all vehicles.


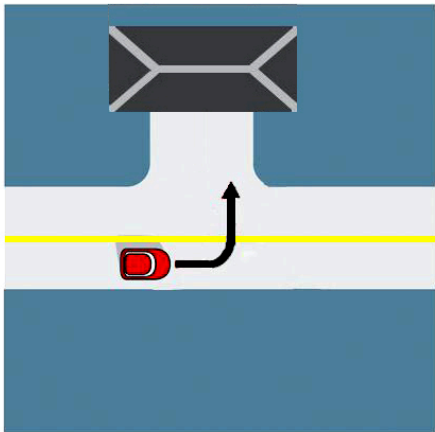

	sufficient safety distance to the preceding vehicle:		Does not concern two wheelers.	
105	Are you allowed to transport objects on a moped?		No, this is always forbidden. Yes, but they cannot impact my driving.	Yes, but they cannot impact my driving.
106	When are you allowed to put on snow chains?		If weather conditions require. It is always prohibited. Only from December 1 to March 31.	If weather conditions require.
107	Your tractor has a length of 5 m. You have coupled a trailer of 10 m. Are you allowed to access this street?		No Yes	No
108	Stopping is forbidden:		Inside built-up area on a priority road. On a zigzag line. On pedestrian crossings.	On pedestrian crossings.

109	In this street you are allowed to:		Make a u-turn. Turn left.	Turn left.
110	What does this traffic sign mean?		I have priority at the next intersection. "I have priority until the sign ""End of priority road""." I have to give way.	I have priority at the next intersection.
111	Before opening a door, do you have to watch traffic coming from behind?		No. Yes.	Yes.
112	Are you allowed to couple several (registered) trailers to your tractor?		No Yes	No
113	In case of full braking, the ABS system allows the reduction of the reaction distance:		No. Yes.	No.
114	You follow a truck with a trailer that is about to turn right to enter in a narrow street. What do you have to expect?		The truck with the trailer will reduce its speed significantly. The truck with the trailer will stop to let me	The truck with the trailer will reduce its speed significantly.


			pass.	
			To turn right, the truck with a trailer will not have to leave its lane.	
115	You are driving a car. Are you allowed to overtake a truck at this place?		No. Yes.	No.
116	Are you allowed to access this road with a tractor?		No. Yes.	No.
117	Before a bend in a steep hill downward, you lower your speed in order to avoid hard braking in the bend:		No. Yes.	Yes.
118	The barriers of a level crossing are open, but the red lights are flashing. Do you have to stop?		No. Yes.	Yes.



119	What does this traffic sign mean?		Access forbidden for cyclists. Access forbidden for pedestrians. Pedestrians and cyclists crossing.	Pedestrians and cyclists crossing.
120	Are you allowed to transport people on a (registered) trailer?		No Yes	No
121	From this traffic sign on:		Waiting is allowed on the sidewalk. Waiting is forbidden on the sidewalk.	Waiting is allowed on the sidewalk.
122	By seeing this traffic sign:		You adapt your speed. You're approaching a road section with a cross-drain.	You adapt your speed.



123	What does this traffic sign mean?		Obligatory lane for pedestrians. Pedestrian zone. Residential zone.	Pedestrian zone.
124	Can you leave the engine running without any technical necessity to do so?		No Yes	No
125	This traffic sign forbids access to mopeds:		No. Yes.	No.
126	As of this traffic sign:		If I put snow chains on at least two driving wheels, I have the right to continue. If my vehicle is equipped with spiked tyres, I have the right to continue. If my vehicle is equipped with winter tyres, I have the right to continue.	If I put snow chains on at least two driving wheels, I have the right to continue.
127	A group of children is		As long as the light is green	I have to expect one of

	<p>waiting next to a pedestrian crossing which is regulated by traffic lights. What do you have to pay attention at?</p>		<p>there is no danger.</p> <p>I accelerate to pass while the light is green.</p> <p>I have to expect one of the children to jump suddenly on the pedestrian crossing.</p>	<p>the children to jump suddenly on the pedestrian crossing.</p>
128	<p>At this place, you expect a longer braking distance:</p>		<p>No.</p> <p>Yes.</p>	<p>Yes.</p>
129	<p>Are you allowed to access your property?</p>		<p>No.</p> <p>Yes.</p>	<p>No.</p>
130	<p>By seeing this signal:</p>		<p>I always have to stop.</p> <p>I circulate on a priority road.</p> <p>I give way to left and right.</p>	<p>I give way to left and right.</p>




131	From what age on are you allowed to drive a high-speed tractor (TGV)?		16 years. 18 years. 21 years.	18 years.
132	Does this traffic sign concern you, if your tractor exceeds the mass indicated?		No Yes	Yes
133	To whom does this traffic sign apply?		To all motor vehicles. To motor vehicles with an authorized maximum mass of less than or equal to 3500 kg. To trucks.	To motor vehicles with an authorized maximum mass of less than or equal to 3500 kg.
134	Is the obligation to carry the seat belt also applicable to the passengers who occupy the rear seats?		No. Yes.	Yes.
135	Regarding tyres:		A profile depth of 1 mm is largely sufficient. It's enough to check tyre pressure once a year. Tyres should show no flaws.	Tyres should show no flaws.



136	What is the risk in rainy weather?		<p>Braking distance can become longer.</p> <p>"The grip of the ""rain tyres"" guarantees me a flawless handling."</p> <p>The wipers guarantee perfect visibility in all conditions.</p>	Braking distance can become longer.
137	Which traffic sign shows that you have to give way? A B C		<p>Alternative A</p> <p>Alternative B</p> <p>Alternative C</p>	Alternative C



				
138	Overtaking is allowed:		<p>Approaching the summit of a hill.</p> <p>In a tunnel on the motorway.</p> <p>On a railway crossing.</p>	In a tunnel on the motorway.
139	Having succeeded in the practical examination of the driver's licence, a course of supplementary training (Colmar-Berg) is compulsory:		<p>No.</p> <p>Yes.</p>	Yes.
140	The load has to be tied firmly in a way that it cannot move:		<p>No</p> <p>Yes</p>	Yes
141	As off this traffic sign:		<p>You don't have the right to enter.</p> <p>You have the right to make a U-turn.</p> <p>You must turn on the dipped headlight.</p>	You must turn on the dipped headlight.



142	Should the safety distance be increased in rainy weather?		No. Yes.	Yes.
143	Is there a minimum profile depth prescribed for the tyres of a dragged vehicle?		No Yes	Yes
144	What does this traffic sign mean?		Beginning of a bus lane. Bus stop. Park and Ride.	Bus stop.
145	From which road signal you have the right to drive up to 40 km/h? A B		Alternative A Alternative B	Alternative B




146	While leaving the motorway, is there a risk of underestimating your speed?		No. Yes.	Yes.
147	Are you allowed to use this parking with your vehicle?		No. Yes.	Yes.
148	The driver of a tractor is allowed to access this street:		No Yes	No
149	What does this traffic sign mean?		Access forbidden to pedestrians. End of the mandatory lane for pedestrians. End of the pedestrian zone.	End of the pedestrian zone.



150	A moped rider is allowed to enter this street:		No. Yes.	No.
151	Are you allowed to overtake a tractor?		No. Yes.	No.
152	What does this traffic sign mean?		I have priority over opposite traffic. I have to give priority to opposite traffic. No opposite traffic.	I have to give priority to opposite traffic.
153	Are you allowed to tow a motorcycle that has had a breakdown, with a cord or towing bar?		No. Yes.	No.
154	Sliding of a vehicle can be caused by:		Inappropriate speed in bends. The ABS braking system.	Inappropriate speed in bends.




			Tyres in good condition.	
155	<p>You are driving a car towing a two-axle trailer.</p> <p>Are you allowed to access this street?</p>		<p>No.</p> <p>Yes.</p>	<p>No.</p>
156	<p>What do you do in this situation?</p>		<p>I brake immediately.</p> <p>I continue to drive normally.</p> <p>I do not need to be prepared to brake as I can't see any children.</p>	<p>I brake immediately.</p>
157	<p>Sliding can be caused:</p>		<p>By a loss of grip, due to the functioning of the ESP system.</p> <p>By significant differences of the air pressure in the tyres.</p> <p>When driving at appropriate speed on a wet road.</p>	<p>By significant differences of the air pressure in the tyres.</p>
158	<p>The driver of a motor vehicle has to carry at least one safety vest in his vehicle:</p>		<p>No.</p> <p>Yes.</p>	<p>Yes.</p>
159	<p>What is the minimum age to be able to drive a self-</p>		<p>16 years.</p> <p>18 years.</p>	<p>18 years.</p>




	propelled working machine of 10 t?		21 years.	
160	What means this road signal?		<p>Attention, circulation in both directions.</p> <p>Priority in comparison with the circulation coming in the opposite direction.</p> <p>Priority to oncoming traffic.</p>	<p>Priority in comparison with the circulation coming in the opposite direction.</p>
161	What does this traffic sign mean?		<p>Deceleration lane.</p> <p>Escape lane.</p> <p>Slow lane.</p>	<p>Slow lane.</p>
162	The driver who is overtaken:		<p>Has to accelerate.</p> <p>Has to brake.</p> <p>Has to keep right as much as possible.</p>	<p>Has to keep right as much as possible.</p>
163	Alcohol consumption can:		<p>Cause a better reaction.</p> <p>Increase high risk driving.</p> <p>Increase the field of vision.</p>	<p>Increase high risk driving.</p>
164	Is the obligation to carry the seat belt also		No.	No.

	applicable to the drivers who carry a reverse out?		Yes.	
165	To save fuel and reduce harmful gas emissions:		<p>You accelerate and you brake repeatedly.</p> <p>You adopt a balanced behaviour.</p> <p>You run at full throttle.</p>	You adopt a balanced behaviour.
166	What behaviour do you adopt in this situation?		<p>By carefully observing traffic behind me, I change to the left lane.</p> <p>I do not any more have the right to change lane.</p> <p>I honk and continue in my lane.</p>	By carefully observing traffic behind me, I change to the left lane.
167	What rule must you observe during the load of your vehicle?		<p>No load needs to be secured.</p> <p>The allowed maximum mass should not be exceeded.</p> <p>There is no height limit.</p>	The allowed maximum mass should not be exceeded.
168	From this traffic sign on, gravel risks compromising your handling:		<p>No.</p> <p>Yes.</p>	Yes.

169	What does this traffic sign mean?		Access forbidden for pedestrians and cyclists. Approaching a pedestrian and cyclist crossing. Attention children.	Approaching a pedestrian and cyclist crossing.
170	As of this traffic sign, waiting is allowed for mopeds:		No Yes	No
171	From this signal you may be deviated from your path:		No Yes	Yes
172	Are you allowed to stop on a bus stop?		No. Yes.	No.

173	Which statement is correct?		<p>Cars are allowed to enter this zone.</p> <p>Trucks are allowed to enter this zone.</p> <p>Vans are allowed to enter this zone.</p>	<p>Cars are allowed to enter this zone.</p>
174	Are you allowed to overtake even if it is not guaranteed that you can get back into the right lane?		<p>No.</p> <p>Yes.</p>	<p>No.</p>
175	How do you behave when leaving the motorway?		<p>I change to the deceleration lane before braking and shifting down.</p> <p>I have to brake before changing to the deceleration lane.</p> <p>I have to shift down before changing to the deceleration lane.</p>	<p>I change to the deceleration lane before braking and shifting down.</p>
176	What does this traffic sign mean?		<p>Access forbidden for cyclists.</p> <p>Cyclists cross.</p> <p>Obligatory bicycle lane.</p>	<p>Obligatory bicycle lane.</p>

177	Are you allowed to cross this lane to access an adjacent property?		No. Yes.	Yes.
178	This traffic sign forbids access to:		Mopeds. Motorcycles with a sidecar. Motorcycles without a sidecar.	Mopeds.
179	At this traffic sign:		I have to turn left. The priority road goes straight on. The priority road turns left.	The priority road turns left.

180	Are you allowed to use this lane?		No. Yes.	No.
181	What does this traffic sign mean?		Access forbidden to vehicles with a length of more than 2 m. Access forbidden to vehicles with a width of more than 2 m. Mandatory minimum safety distance of 2 m.	Access forbidden to vehicles with a width of more than 2 m.
182	Where is it forbidden to make a U-turn?		In a tunnel. On a priority road inside built-up areas. On a priority road outside built-up areas.	In a tunnel.
183	From this traffic sign on:		Stopping is forbidden on both sides of the road. Stopping is forbidden on the road and on the verge. Stopping is only forbidden on the verge.	Stopping is forbidden on the road and on the verge.

184	Which paper must a moped driver present in case of a police control?		Insurance certificate. Tax card. Technical control certificate.	Insurance certificate.
-----	--	--	---	------------------------